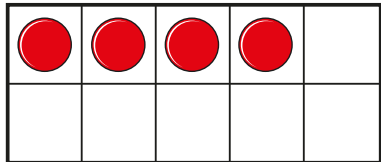
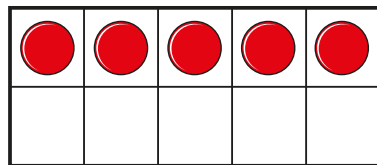
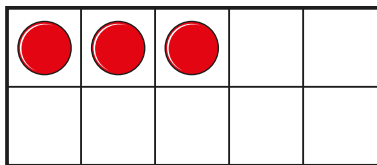





**1** Here is 4




Tick 1 less than 4




**2** Draw 1 less than 7



**3 a)** Circle 1 less than 5



**b)** Circle 1 less than 6



**4** Write the missing numbers.

a) 1 less than three is

b) 1 less than 7 is

c) 1 less than 9 is

d) 1 less than 1 is

**5** Write the missing numbers.

a) 1 less than  is 5

b) 1 less than  is 9

c) 1 less than  is zero.

**6** Ron makes a shape with cubes.

Jo wants to make a shape. She has 1 less cube.

What shapes can Jo make?

