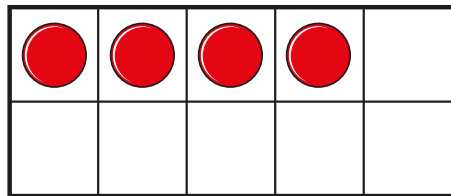
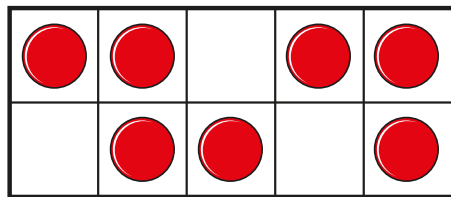




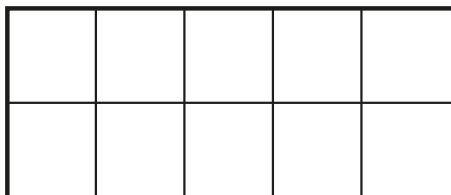
1 a) Draw 1 more than 4



b) Draw 1 more than 7




c) Draw 1 more than 5



2 a) Circle 1 more than 6



b) Circle 1 more than 1



3 Write the missing numbers.

a) 1 more than 3 is

b) 1 more than seven is

c) 1 more than 9 is

d) 1 more than 0 is

4 Write the missing numbers.

a) 1 more than is 5

b) 1 more than is nine.

c) 1 more than is 1

5 Colour the number that is 1 more than 8

10	9	8	7	6	5	4	3	2	1
----	---	---	---	---	---	---	---	---	---

